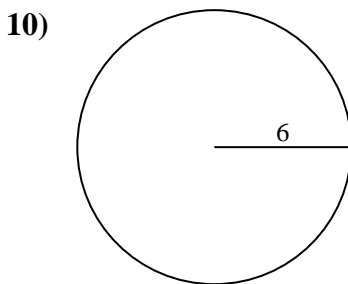
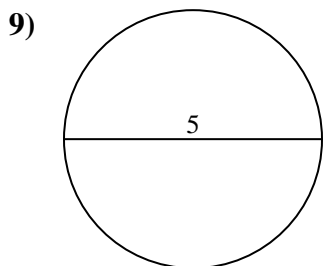
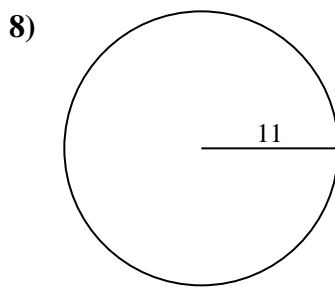
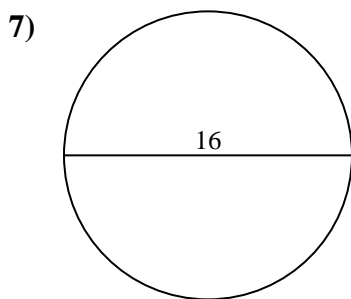
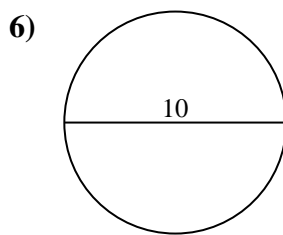
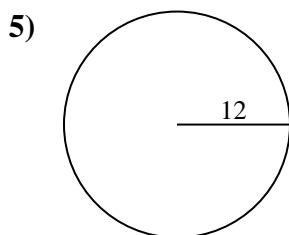
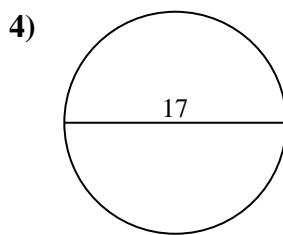
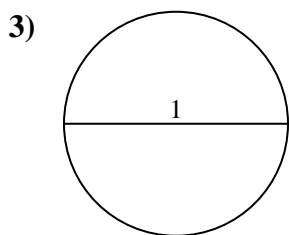
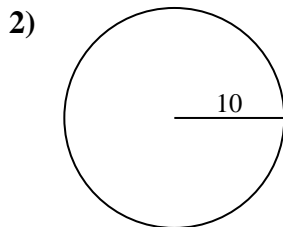
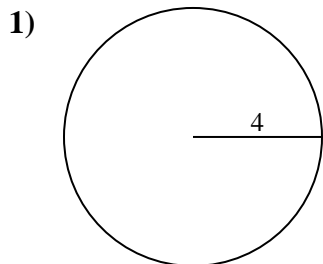




Find the area of the circle. Round to the nearest 10th.

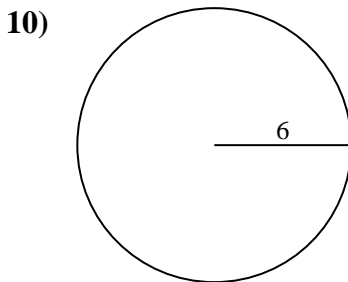
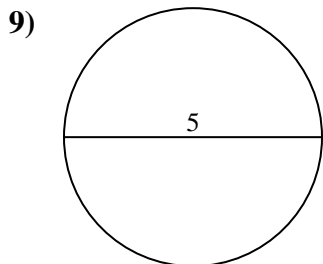
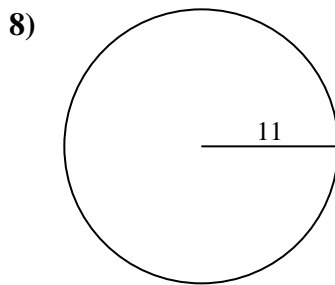
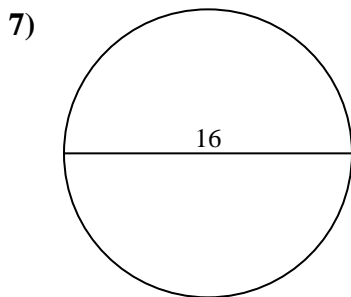
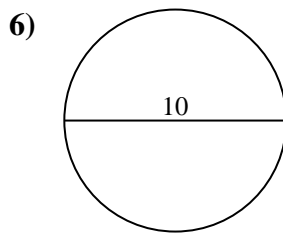
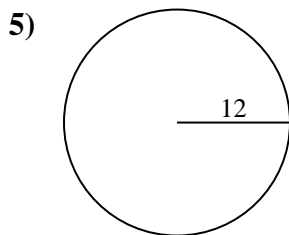
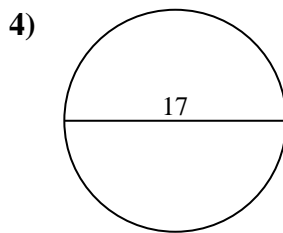
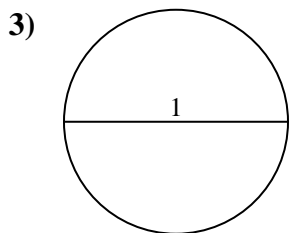
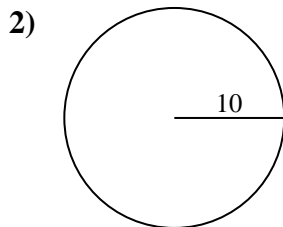
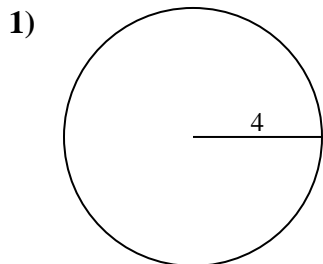
Answers



- 1. _____
- 2. _____
- 3. _____
- 4. _____
- 5. _____
- 6. _____
- 7. _____
- 8. _____
- 9. _____
- 10. _____



Find the area of the circle. Round to the nearest 10th.



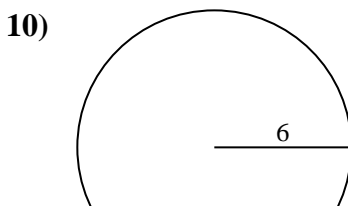
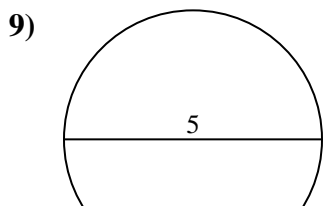
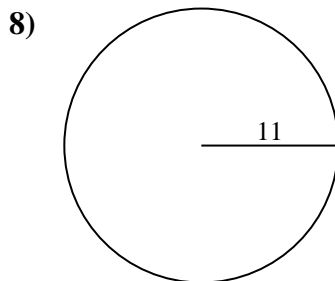
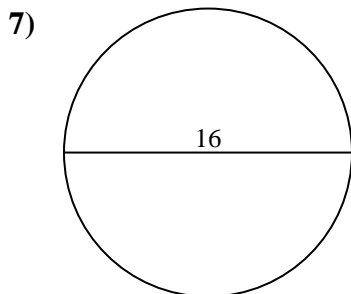
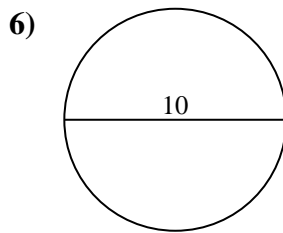
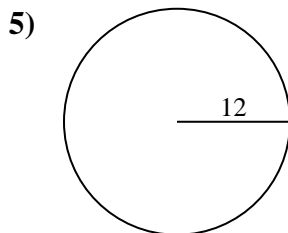
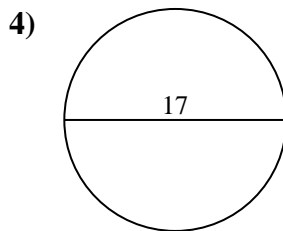
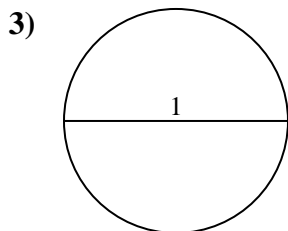
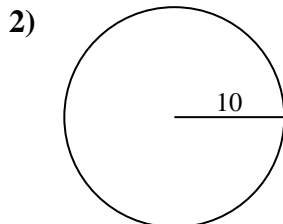
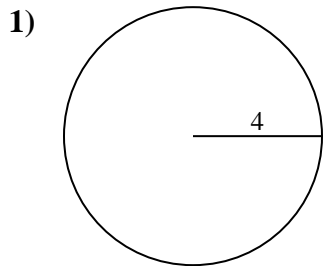
Answers

- 1. 50.3
- 2. 314.2
- 3. 0.8
- 4. 227
- 5. 452.4
- 6. 78.5
- 7. 201.1
- 8. 380.1
- 9. 19.6
- 10. 113.1



Find the area of the circle. Round to the nearest 10th.

| | | | | |
|-------|-------|------|-------|-------|
| 113.1 | 19.6 | 0.8 | 78.5 | 452.4 |
| 201.1 | 380.1 | 50.3 | 314.2 | 227 |



Answers

1. _____
2. _____
3. _____
4. _____
5. _____
6. _____
7. _____
8. _____
9. _____
10. _____